



Inferential Statistics and Probability a Holistic Approach

Chapter 6 Continuous Random Variables



This Course Material by Maurice Geraghty is licensed under a Creative Commons Attribution-ShareAlike 4.0 International License.
Conditions for use are shown here: <https://creativecommons.org/licenses/by-sa/4.0/>


1



Continuous Distributions

- “Uncountable” Number of possibilities
- Probability of a point makes no sense
- Probability is measured over intervals
- Comparable to Relative Frequency Histogram – Find Area under curve.

2



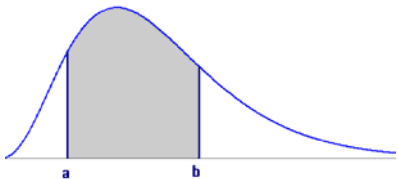
Discrete vs Continuous

■ Countable	■ Uncountable
■ Discrete Points	■ Continuous Intervals
■ $p(x)$ is probability distribution function	■ $f(x)$ is probability density function
■ $p(x) \geq 0$	■ $f(x) \geq 0$
■ $\sum p(x) = 1$	■ Total Area under curve = 1

3

Continuous Random Variable

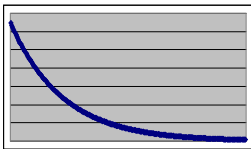
- $f(x)$ is a density function
- $P(X < x)$ is a distribution function.
- $P(a < X < b) =$ area under function between a and b



4

Exponential distribution

- Waiting time
- "Memoryless"
- $f(x) = (1/\mu)e^{-(1/\mu)x}$
- $P(x > a) = e^{-(a/\mu)}$
- $\mu = \mu \quad \sigma^2 = \mu^2$
- $P(x > a+b | x > b) = e^{-(a/\mu)}$



5

Examples of Exponential Distribution

- Time until...
- a circuit will fail
- the next RM 7 Earthquake
- the next customer calls
- An oil refinery accident
- you buy a winning lotto ticket


6

Relationship between Poisson and Exponential Distributions

- If occurrences follow a **Poisson Process** with mean = μ , then the waiting time for the next occurrence has **Exponential** distribution with mean = $1/\mu$.
- Example: If accidents occur at a plant at a constant rate of 3 per month, then the expected waiting time for the next accident is $1/3$ month.

7

Exponential Example



The time until a screen is cracked on a smart phone has exponential distribution with $\mu=500$ hours of use.

(a) Find the probability screen will not crack for at least 600 hours.

$$P(x>600) = e^{-600/500} = e^{-1.2} = .3012$$

(b) Assuming that screen has already lasted 500 hours without cracking, find the chance the display will last an additional 600 hours.

$$P(x>1100|x>500) = P(x>600) = .3012$$

8

Exponential Example

The time until a screen is cracked on a smart phone has exponential distribution with $\mu=500$ hours of use.

(a) Find the median of the distribution

$$P(x>med) = e^{-(med)/500} = 0.5$$
$$med = -500\ln(.5) = 347$$
$$p^{\text{th}} \text{ Percentile} = -\mu \ln(1-p)$$

9

Uniform Distribution

- Rectangular distribution
- Example: Random number generator

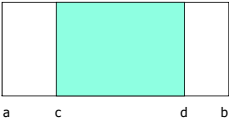
$$f(x) = \frac{1}{b-a} \quad a \leq x \leq b$$

$$\mu = E(X) = \frac{b+a}{2}$$

$$\sigma^2 = Var(X) = \frac{(b-a)^2}{12}$$

10

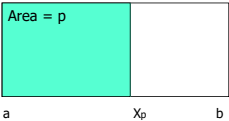
Uniform Distribution - Probability



$$P(c < X < d) = \frac{d-c}{b-a}$$

11

Uniform Distribution - Percentile



Area = p

Formula to find the pth percentile X_p :

$$X_p = a + p(b-a)$$

12

Uniform Example 1

- Find mean, variance, $P(X < 3)$ and 70th percentile for a uniform distribution from 1 to 11.

$$\mu = \frac{1+11}{2} = 6 \quad \sigma^2 = \frac{(11-1)^2}{12} = 8.33$$


$$P(X < 3) = \frac{3-1}{11-1} = 0.3$$

$$X_{70} = 1 + 0.7(11-1) = 8$$

13

Uniform Example 2

- A tea lover orders 1000 grams of Tie Guan Yin loose leaf when his supply gets to 50 grams.
- The amount of tea currently in stock follows a uniform random variable.
- Determine this model
- Find the mean and variance
- Find the probability of at least 700 grams in stock.
- Find the 80th percentile



14

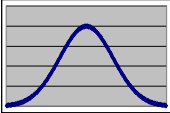
Uniform Example 3

- A bus arrives at a stop every 20 minutes.
 - Find the probability of waiting more than 15 minutes for the bus after arriving randomly at the bus stop.
 - If you have already waited 5 minutes, find the probability of waiting an additional 10 minutes or more. (Hint: recalculate parameters a and b)

15

Normal Distribution

- The normal curve is *bell-shaped*
- The mean, median, and mode of the distribution are equal and located at the peak.
- The normal distribution is *symmetrical* about its mean. Half the area under the curve is above the peak, and the other half is below it.
- The normal probability distribution is *asymptotic* - the curve gets closer and closer to the x-axis but never actually touches it.



$$f(x) = \frac{e^{-\frac{1}{2\sigma^2}(x-\mu)^2}}{\sigma\sqrt{2\pi}}$$

16

The Standard Normal Probability Distribution

- A normal distribution with a mean of 0 and a standard deviation of 1 is called the *standard normal distribution*.
- Z value:** The distance between a selected value, designated x , and the population mean μ , divided by the population standard deviation, σ


$$Z = \frac{X - \mu}{\sigma}$$

17

Areas Under the Normal Curve – Empirical Rule


- About 68 percent of the area under the normal curve is within one standard deviation of the mean. $\mu \pm 1\sigma$
- About 95 percent is within two standard deviations of the mean $\mu \pm 2\sigma$
- 99.7 percent is within three standard deviations of the mean. $\mu \pm 3\sigma$

18

 **EXAMPLE**


- The daily water usage per person in a town is normally distributed with a mean of 20 gallons and a standard deviation of 5 gallons.
- About 68% of the daily water usage per person in New Providence lies between what two values?
- $\mu \pm 1\sigma = 20 \pm 1(5)$. That is, about 68% of the daily water usage will lie between 15 and 25 gallons.

19

 **Normal Distribution – probability problem procedure**


- Given: Interval in terms of X
- Convert to Z by $Z = \frac{X - \mu}{\sigma}$
- Look up probability in table.

20

 **EXAMPLE**

- The daily water usage per person in a town is normally distributed with a mean of 20 gallons and a standard deviation of 5 gallons.
- What is the probability that a person from the town selected at random will use less than 18 gallons per day?
- The associated **Z value** is $Z = (18 - 20) / 5 = -0.40$.
- Thus, $P(X < 18) = P(Z < -0.40) = .3446$


21



EXAMPLE *continued*

- The daily water usage per person in a town is normally distributed with a mean of 20 gallons and a standard deviation of 5 gallons.
- What proportion of the people uses between 18 and 24 gallons?
- The **Z value** associated with $x=18$ is $Z=-0.40$ and with $X=24$, $Z=(24-20)/5=0.80$.
- Thus, $P(18 < X < 24) = P(-0.40 < Z < 0.80) = .7881 - .3446 = .4435$


22



EXAMPLE *continued*

- The daily water usage per person in a town is normally distributed with a mean of 20 gallons and a standard deviation of 5 gallons.
- What percentage of the population uses more than 26.2 gallons?
- The **Z value** associated with $X=26.2$, $Z=(26.2-20)/5=1.24$.
- Thus $P(X > 26.2) = P(Z > 1.24) = 1 - .8925 = .1075$

23




Normal Distribution – percentile problem procedure

- Given: probability or percentile desired.
- Look up Z value in table that corresponds to probability.
- Convert to X by the formula:


$$X = \mu + Z\sigma$$

24

 **EXAMPLE**


- The daily water usage per person in a town is normally distributed with a mean of 20 gallons and a standard deviation of 5 gallons. A special tax is going to be charged on the top 5% of water users.
- Find the value of daily water usage that generates the special tax
- The Z value associated with 95th percentile = 1.645
- $X = 20 + 5(1.645) = 28.2$ gallons per day

25

 **EXAMPLE**

- Professor Kurv has determined that the final averages in his statistics course is normally distributed with a mean of 77.1 and a standard deviation of 11.2.
- He decides to assign his grades for his current course such that the top 15% of the students receive an A.
- What is the lowest average a student can receive to earn an A?
- The top 15% would be the finding the 85th percentile. Find k such that $P(X < k) = .85$.
- The corresponding Z value is 1.04. Thus we have $X = 77.1 + (1.04)(11.2)$, or **X = 88.75**

26

 **EXAMPLE**

- The amount of tip the servers in an exclusive restaurant receive per shift is normally distributed with a mean of \$80 and a standard deviation of \$10.
- Shelli feels she has provided poor service if her total tip for the shift is less than \$65.
- What percentage of the time will she feel like she provided poor service?
- Let y be the amount of tip. The Z value associated with $X = 65$ is $Z = (65 - 80) / 10 = -1.5$.
- Thus $P(X < 65) = P(Z < -1.5) = .0668$.

27
